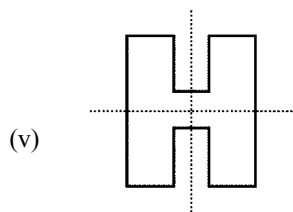
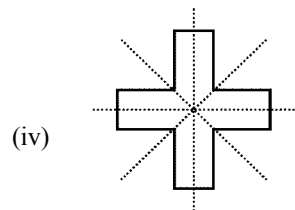
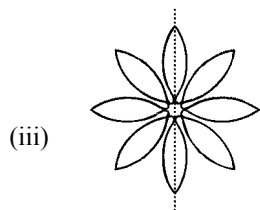
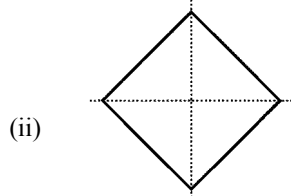
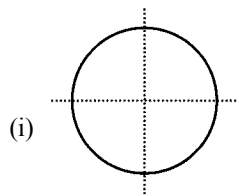


<b>Time: 10 Minutes</b>	<b>Paper Math 3</b>	<b>Total Marks: 10</b>
-------------------------	---------------------	------------------------

6th Month, 2nd Week, 2nd Day	<b>Syllabus:</b>
------------------------------	------------------

**Q.1. Count the number of lines of symmetry in the following figures. (10)**

درج ذیل اشکال میں خط تاشاکل کی تعداد لکھیں۔




---



---



---



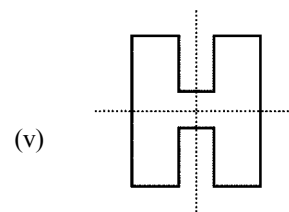
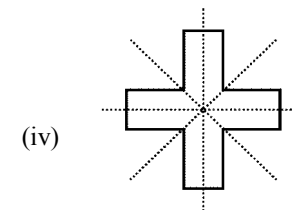
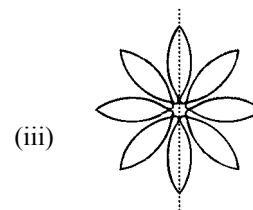
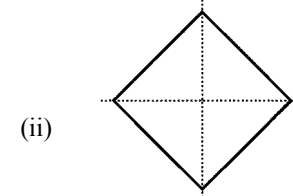
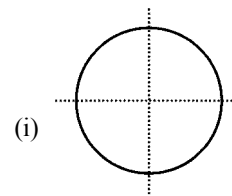
---

<b>Time: 10 Minutes</b>	<b>Paper Math 3</b>	<b>Total Marks: 10</b>
-------------------------	---------------------	------------------------

6th Month, 2nd Week, 2nd Day	<b>Syllabus:</b>
------------------------------	------------------

**Q.1. Count the number of lines of symmetry in the following figures. (10)**

درج ذیل اشکال میں خط تاشاکل کی تعداد لکھیں۔




---



---



---



---